

7th Grade, Week 5/26-5/29

Due: 6/1 Return all School Books!! :)

******Last day for missing work is June 1st!!!**

Tuesday:

Math- Khan Academy (26 pts)

Angles: introduction (video, 5pts)

Name angles (exercise, 4pts)

Complementary & supplementary angles (video, 5pts)

Vertical angles (video, 5pts)

Identifying supplementary, complementary, and vertical angles (exercise, 7pts)

Science- Chpt 13 Review

History- Chpt 11 Practice Test

Wednesday:

Math- Khan Academy (20pts)

Complementary and supplementary angles (visual) (exercise, 4pts)

Complementary and supplementary angles (no visual) (exercise, 7pts)

Complementary and supplementary angles review (article, 5pts)

Vertical angles (exercise, 4pts)

Thursday: Virtual Meeting at 10:00am

Math- Khan Academy (26pts)

Finding angle measures between intersecting lines (exercise, 4pts)

Find measure of vertical angles (video, 5pts)

Finding missing angles (exercise, 7pts)

Find measures of angles word problem (video, 5pts)

Equation practice with complementary angles (video, 5pts)

Science- Chpt 13 Test

History- Chpt 11 Test [quizizz.com/join?gc=6292362](https://www.quizizz.com/join?gc=6292362)

Friday:

Math- Khan Academy (38 pts)

Equation practice with supplementary angles (video, 5pts)

Equation practice with vertical angles (video, 5pts)

Create equations to solve for missing angles (exercise, 7 pts)

Unknown angle problems (with algebra) (exercise, 7pts)

Geometry: Quiz 2 (14 questions)

Chapter Review

The Human Reproductive System

CHAPTER 13

Part A. Vocabulary Review

Directions: Identify the correct term in the following list to match each description. Then write it on the line provided.

- | | | | |
|-------------|------------------|----------------|----------------|
| endometrium | epididymis | fallopian tube | fetus |
| follicle | menstrual cycle | ovulation | placenta |
| pregnancy | seminal vesicles | trimester | umbilical cord |

- _____ 1. process of releasing eggs on a monthly basis
- _____ 2. the lining of the uterus
- _____ 3. period of fetal development lasting nine months
- _____ 4. changes that take place before, during, and after ovulation
- _____ 5. developing baby after two months of pregnancy
- _____ 6. glands that make most of the liquid in semen
- _____ 7. organ within the scrotum that stores sperm
- _____ 8. each of the three stages of pregnancy
- _____ 9. an egg cell together with its surrounding cells
- _____ 10. disc-shaped organ through which materials are exchanged
- _____ 11. organ where fertilization usually occurs
- _____ 12. connects the fetus to the placenta

Part B. Concept Review

Directions: Respond to the following statement.

1. **Develop** a set of instructions for pregnant women that would promote fetal health. Be sure to include advice on nutrition, viral infections, and exposure to harmful substances in the environment. Use an additional sheet of paper if necessary.

Chapter Review CONTINUED

Directions: Compare and contrast the male and female reproductive systems by choosing the correct name for each structure from the list below and writing it on the appropriate blank.

bladder

cervix

fallopian tube

ovary

penis

prostate gland

scrotum

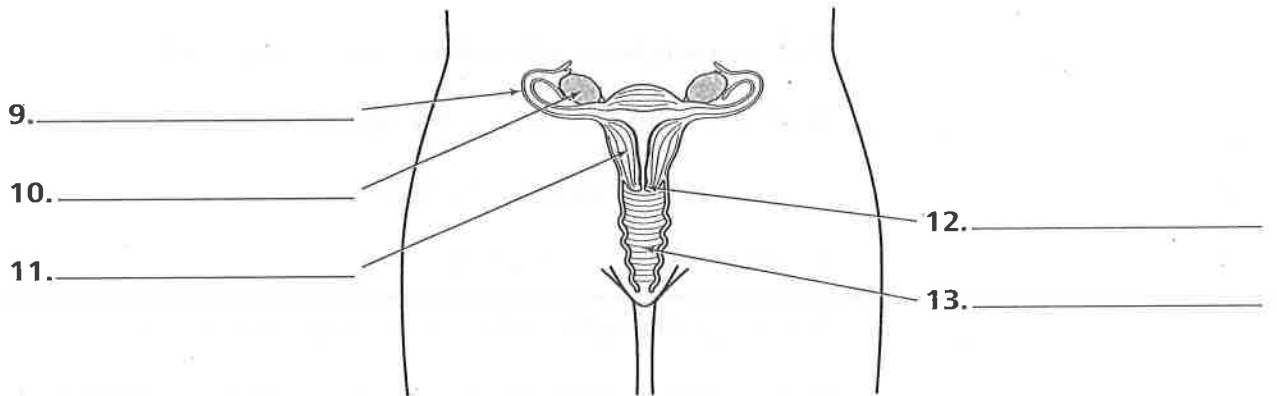
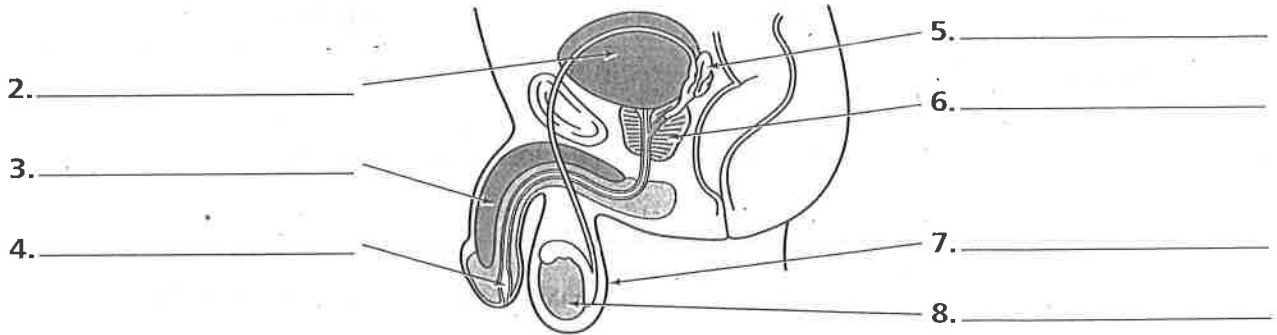
testes

urethra

uterus

vagina

vas deferens



14. Infer why millions of sperm are released to fertilize a single egg.

QUIZIZZ

Enlightenment chpt 11


20 Questions

NAME : _____

CLASS : _____

DATE : _____

1.



French Enlightenment philosopher who strongly believed in freedom of speech and religion


a) Voltaire

b) Denis Diderot

c) Mary Wollstonecraft

d) John Locke

2.



Enlightenment philosopher who believed people had natural rights of life, liberty, and property.

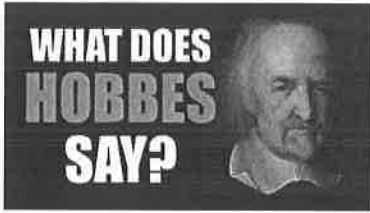
a) John Locke

b) Montesquieu

c) Rousseau

d) Voltaire

3.



How did Hobbes view human nature?

- a) We are inquisitive and industrious.
- b) We are naturally selfish and quick to fight.
- c) We are naturally ignorant
- d) We are naturally kind and helpful to others

4. Which of the following would be another good name for the Enlightenment?

- a) The Age of Reason
- b) The Age of Great Philosophers
- c) The Age of Religion
- d) The Age of Revolution

5. John Locke, Jean Rousseau, and Voltaire all lived during what was called the:

- a) Dark Ages
- b) Middle Ages
- c) Enlightenment
- d) Depression

6. Which Enlightenment philosopher argued that people have the right to abolish their government and create a new one?

- a) Montesquiere
- b) Locke
- c) Voltaire
- d) Rousseau

7. An agreement between people and the government to give up some rights for safety and protection

- a) Philosophers
- b) Democracy
- c) Social Contract
- d) Divine Right of Kings

8. The rights of life, liberty, and property are called:

- a) Unalienable Rights
- b) Essential Rights
- c) Natural Rights
- d) Original Rights

9. What did Jean-Jacques Rousseau believe about government?

- a) some government control is necessary, but it should be kept to a minimum
- b) the government should control all aspects of our lives
- c) the government should be led by an absolute monarch

10. Which Enlightenment philosopher believed that governments should be based on majority rule?

- a) Rousseau
- b) Voltaire
- c) Locke
- d) Hobbes

11. Which Enlightenment philosopher argued that power comes from the "Consent of the Governed?"

- a) Hobbes
- b) Locke
- c) Voltaire
- d) Rousseau

12. During enlightenment, democracy powers rest with which group of people

- a) women
- b) men
- c) citizens
- d) kings

13. Who said all men are created equal?

- a) Issac Newton
- b) George Washington
- c) Christopher Columbus
- d) John Locke

14. Which is the best answer on how enlightenment influence society?

- a) it influenced monarchies rights
- b) it influenced citizen rights
- c) it influenced government rights
- d) it influenced women rights

15. Who said citizens require harsh and strict laws?

- a) Thomas Hobbes
- b) Thomas Jefferson
- c) George Washington
- d) John Locke

16. Which of the following said "..they are endowed by their Creator with certain unalienable rights....life, liberty, and the pursuit of happiness?

- a) Thomas Edison
- b) Issac Newton
- c) Leonardo Davinci
- d) John Locke

17. According to what you have learned, who said women should be treated as equal as men?

- a) Hillary Clinton
- b) Barbara Walters
- c) Mary Wollstonecraft
- d) Voltaire

18. The belief that government should be divided so that no one should have complete authority is called....

- a) job specialization
- b) separation of powers
- c) divine rights
- d) monarchy rights

19. The belief that people rights should be protected should be the concern of which of the following?

- a) the queen
- b) the king
- c) the government
- d) the people

20. The willingness of people to hand over their rights to rules in exchange for law and social order is called...

a) method of government

b) enlightenment agreement

c) social contract

d) US Constitution

Chapter Test A The Human Reproductive System

Part A. Multiple Choice

Directions: Write the letter of the term that correctly answers each question in the space at the left.

- _____ 1. What describes the egg once it is united with the sperm?
 A. prenatal
 B. ovulated
 C. fertilized
 D. menstruation
- _____ 2. How are the nine months of pregnancy divided?
 A. days
 B. weeks
 C. bimonthly
 D. trimesters
- _____ 3. Where are egg cells produced?
 A. vagina
 B. uterus
 C. ovaries
 D. oviduct

Part B. Matching

Directions: Write the letter of the correct term on the line next to its description. Answers may be used only once.

Matching Set 1

- _____ 1. produces a thin, milky fluid that contains enzymes and nutrients
- _____ 2. mixture of sperm and fluid that nourishes the sperm and helps them to move
- _____ 3. chemical messengers that regulate the body
- A. semen
 B. hormones
 C. seminal vesicles

Matching Set 2

- _____ 4. release of an egg from a follicle into a fallopian tube
- _____ 5. organ which produces eggs
- _____ 6. thick, muscular organ where a fertilized egg can develop
- D. uterus
 E. ovulation
 F. ovary

Chapter Test **A** CONTINUED

Part C. Completing a Table

Directions: Use the following terms to complete the table: embryo, fetus, trimester, zygote. Terms may be more than once or not at all.

	Name	Size	Development
First 1. _____	2. _____	7.5 cm	heart is beating
Second 3. _____	4. _____	25–30 cm	kicking and moving
Third 5. _____	6. _____	triples in size	rapid growth; could survive premature birth

Part D. Short Answer

Directions: Respond to each statement in the space provided.

1. Describe how an egg cell moves down the fallopian tube.

2. Explain why sperm must be in the right place at the right time for fertilization to occur.
